

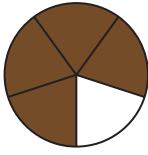


Subtracting Fractions

Name _____

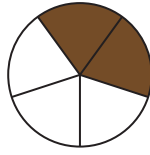
Score _____

1)



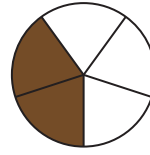
$\frac{4}{5}$

—

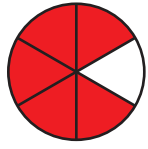


$\frac{2}{5}$

=

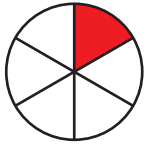


2)



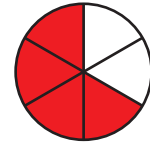
$\frac{5}{6}$

—




$\frac{1}{6}$

=

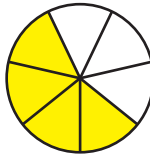


3)



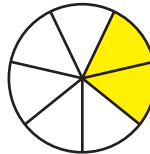
$\frac{6}{7}$

—




$\frac{4}{7}$

=

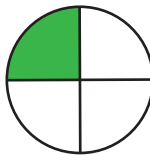


4)




$\frac{3}{4}$

—

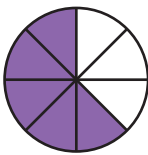


$\frac{1}{4}$

=

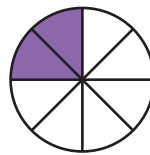


5)



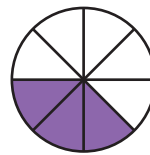
$\frac{5}{8}$

—



$\frac{2}{8}$

=





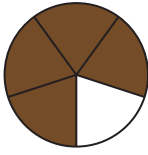
Name _____

Score _____

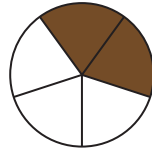
Subtracting Fractions

Answer key

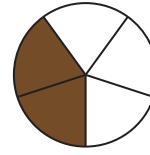
1)

 $\frac{4}{5}$

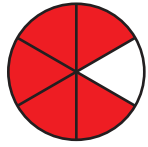
-

 $\frac{2}{5}$

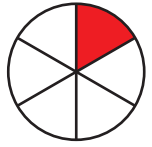
=

 $\frac{2}{5}$

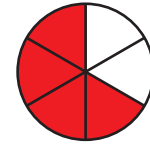
2)

 $\frac{5}{6}$

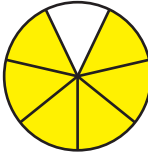
-

 $\frac{1}{6}$

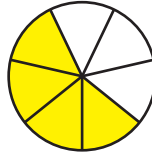
=

 $\frac{4}{6}$

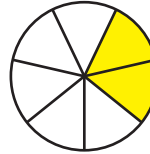
3)

 $\frac{6}{7}$


-

 $\frac{4}{7}$

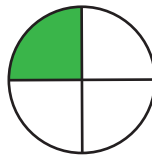
=

 $\frac{2}{7}$

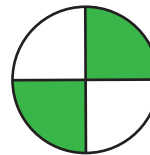
4)

 $\frac{3}{4}$

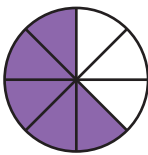
-

 $\frac{1}{4}$

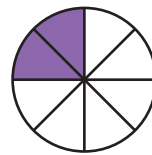
=

 $\frac{2}{4}$

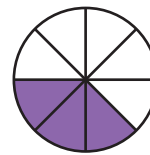
5)

 $\frac{5}{8}$

-

 $\frac{2}{8}$

=

 $\frac{3}{8}$