



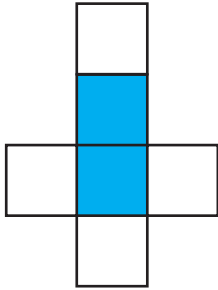
RATIO

Name _____

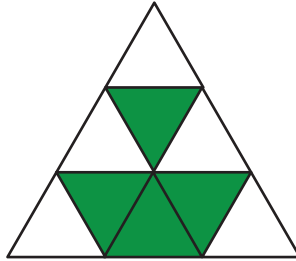
Score _____

Find the ratio of shaded region to unshaded region.

1)



2)




3)

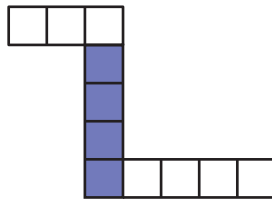


Find the ratio of unshaded region to shaded region.

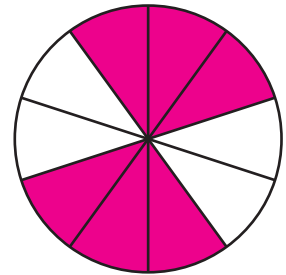
1)



2)



3)



Write the ratios in the form 1 : n.

1) 10 : 3

2) 15 : 75

3) 4 : 21

4) 18 : 9

Write the ratios in the form n : 1.

1) 7 : 28

2) 144 : 12

3) 63 : 18

4) 30 : 6



RATIO

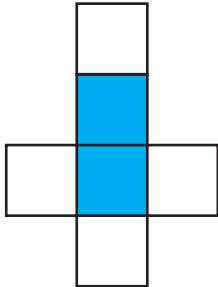
Name _____

Score _____

Answer key

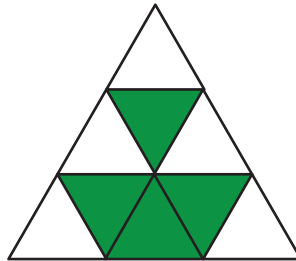
Find the ratio of shaded region to unshaded region.

1)




2 : 4 or 1 : 2

2)



4 : 5


3)



5 : 2

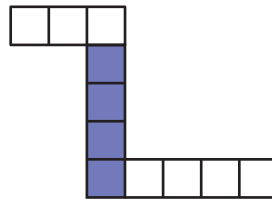
Find the ratio of unshaded region to shaded region.

1)



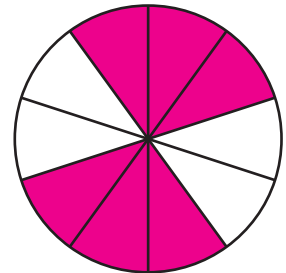
3 : 9 or 1 : 3

2)



7 : 4

3)



4 : 6 or 2 : 3

Write the ratios in the form 1 : n.

1) 10 : 3

1 : 0.3

2) 15 : 75

1 : 5

3) 4 : 21

1 : 5.25

4) 18 : 9

1 : 0.5

Write the ratios in the form n : 1.

1) 7 : 28

0.25 : 1

2) 144 : 12

12 : 1

3) 63 : 18

3.5 : 1

4) 30 : 6

5 : 1