



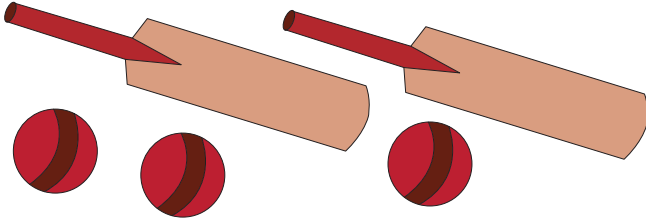
RATIO

Name _____

Score _____

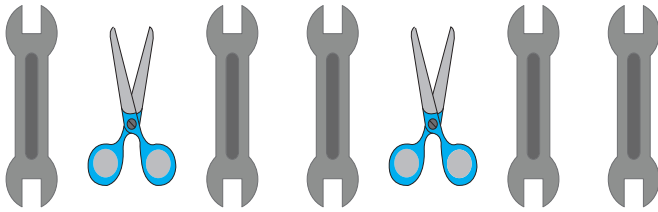
Express the ratio in three ways.

1) bats to balls




Words	Ratio	Fraction

2) tools to spanners



Words	Ratio	Fraction

3) tomatoes to pears



Words	Ratio	Fraction

4) Write the ratio of 3 cups to 9 plates.

Words	Ratio	Fraction

5) Write the ratio of 11 caterpillars to 12 snakes.

Words	Ratio	Fraction



RATIO

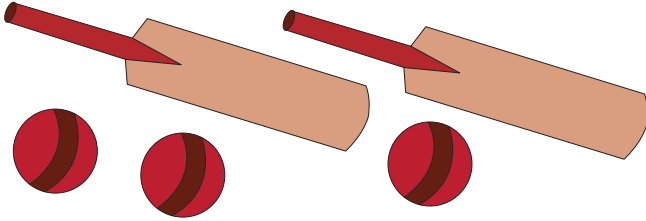
Name _____

Score _____

Answer key

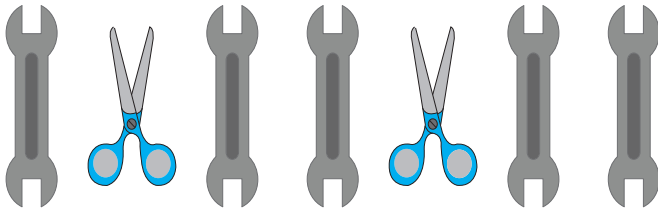
Express the ratio in three ways.

1) bats to balls




Words	Ratio	Fraction
2 to 3	2 : 3	$\frac{2}{3}$

2) tools to spanners



Words	Ratio	Fraction
7 to 5	7 : 5	$\frac{7}{5}$

3) tomatoes to pears



Words	Ratio	Fraction
3 to 6 or 1 to 2	3 : 6 or 1 : 2	$\frac{3}{6}$ or $\frac{1}{2}$

4) Write the ratio of 3 cups to 9 plates.

Words	Ratio	Fraction
3 to 9 or 1 to 3	3 : 9 or 1 : 3	$\frac{3}{9}$ or $\frac{1}{3}$

5) Write the ratio of 11 caterpillars to 12 snakes.

Words	Ratio	Fraction
11 to 12	11 : 12	$\frac{11}{12}$