




RATIO

Name _____

Score _____

1)




a) Write the ratio of hexagons to shapes.

b) The ratio of stars to hexagons is

c) What is the ratio of shapes to stars?

d) The ratio of hexagons to stars is

2)



a) What is the ratio of fruits to oranges?

b) The ratio of oranges to pineapples is

c) Write the ratio of pineapples to oranges.

d) The ratio of pineapples to fruits is



RATIO

Name _____

Score _____

Answer key



a) Write the ratio of hexagons to shapes.

3 : 12 or 1 : 4

b) The ratio of stars to hexagons is


9 : 12 or 3 : 4

c) What is the ratio of shapes to stars?

12 : 9 or 4 : 3

d) The ratio of hexagons to stars is

3 : 9 or 1 : 3



a) What is the ratio of fruits to oranges?

11 : 5

b) The ratio of oranges to pineapples is

5 : 6

c) Write the ratio of pineapples to oranges.

6 : 5

d) The ratio of pineapples to fruits is

6 : 11