




RATIO

Name _____

Score _____



The ratio of to is _____



The ratio of to is _____




The ratio of to is _____



The ratio of fruits to mangoes is _____



The ratio of a bus to vehicles is _____



The ratio of animals to elephants is _____




RATIO

Name _____

Score _____

Answer key



The ratio of to is 3 : 4



The ratio of to is 7 : 5




The ratio of to is 6 : 2 or 3 : 1



The ratio of fruits to mangoes is 13 : 8



The ratio of a bus to vehicles is 1 : 7



The ratio of animals to elephants is 10 : 6 or 5 : 3