



RATIO

Name _____


Score _____




The ratio of  to  is _____



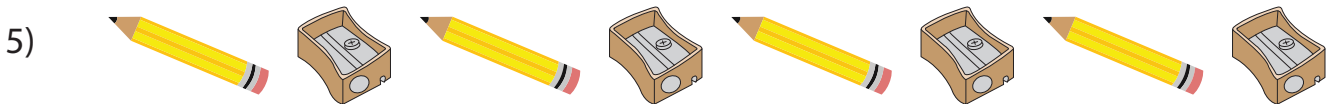
The ratio of  to  is _____



The ratio of  to  is _____



The ratio of crabs to sea animals is _____



The ratio of stationery to pencils is _____



The ratio of eggplants to vegetables is _____



RATIO


Name _____

Score _____


Answer key




The ratio of to is 8 : 6 or 4 : 3



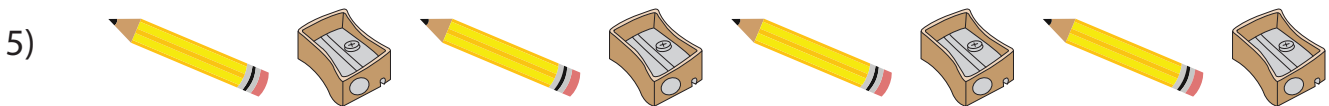
The ratio of to is 1 : 3



The ratio of to is 4 : 5



The ratio of crabs to sea animals is 3 : 10



The ratio of stationery to pencils is 8 : 4 or 2 : 1



The ratio of eggplants to vegetables is 7 : 11