

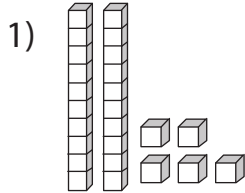


PLACE VALUE

Name _____

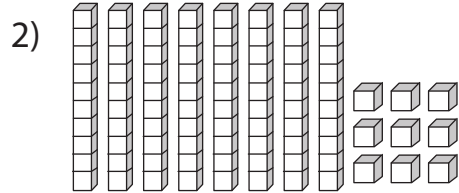
Score _____

Write down the number of tens and ones using the blocks.



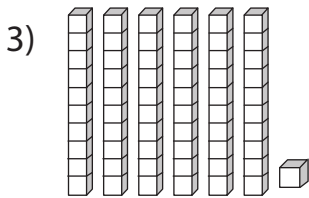
Tens

Ones



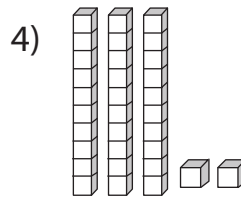
Tens

Ones



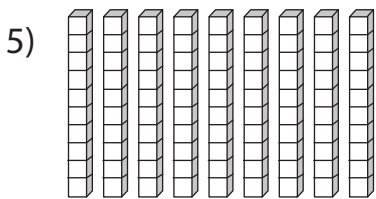
Tens

Ones



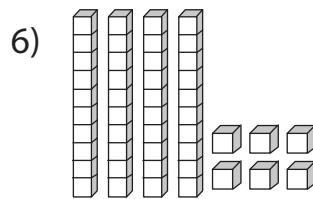
Tens

Ones



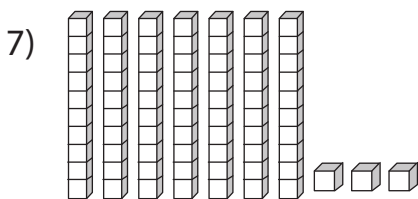
Tens

Ones



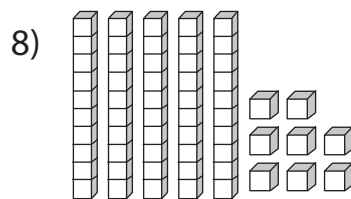
Tens

Ones



Tens

Ones



Tens

Ones



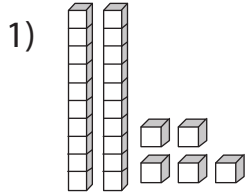
PLACE VALUE

Answer key

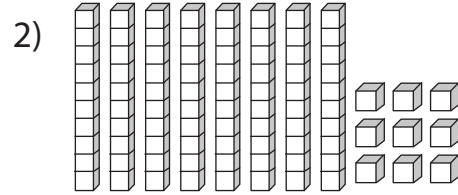
Name _____

Score _____

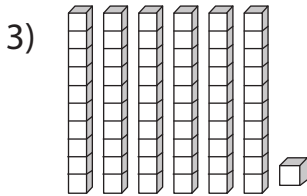
Write down the number of tens and ones using the blocks.



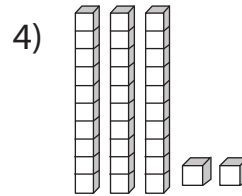
2 5
Tens Ones



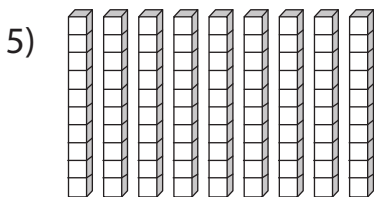
8 9
Tens Ones



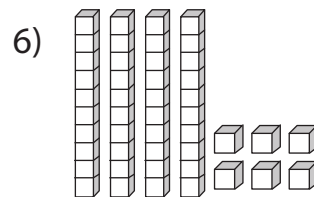
6 1
Tens Ones



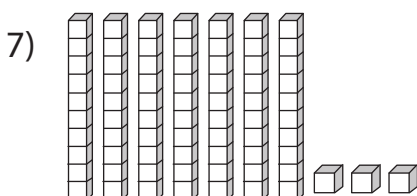
3 2
Tens Ones



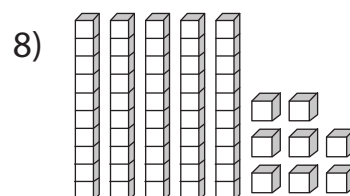
9 0
Tens Ones



4 6
Tens Ones



7 3
Tens Ones



5 8
Tens Ones