



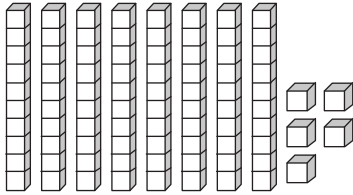
PLACE VALUE

Name _____

Score _____

Write down the number of tens and ones using the blocks.

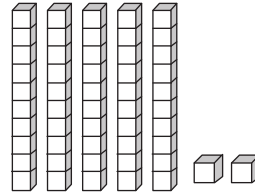
1)



Tens

Ones

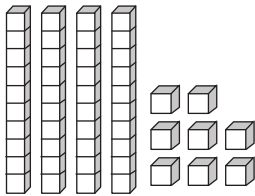
2)



Tens

Ones

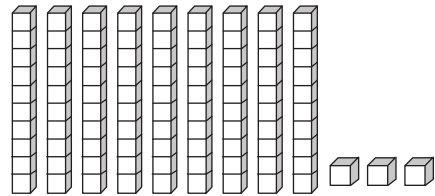
3)



Tens

Ones

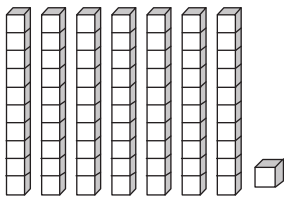
4)



Tens

Ones

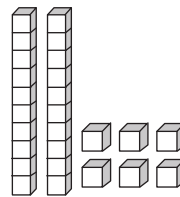
5)



Tens

Ones

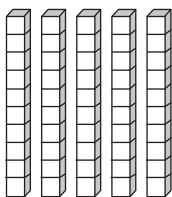
6)



Tens

Ones

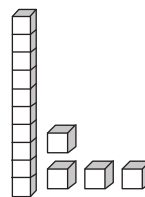
7)



Tens

Ones

8)



Tens

Ones



PLACE VALUE

Answer key

Name _____

Score _____

Write down the number of tens and ones using the blocks.

