

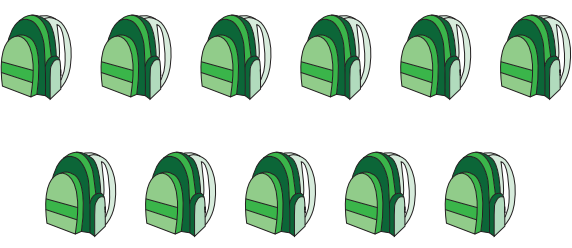


# PLACE VALUE


Name \_\_\_\_\_

Score \_\_\_\_\_


Count and write the correct number of tens and ones in the blanks.



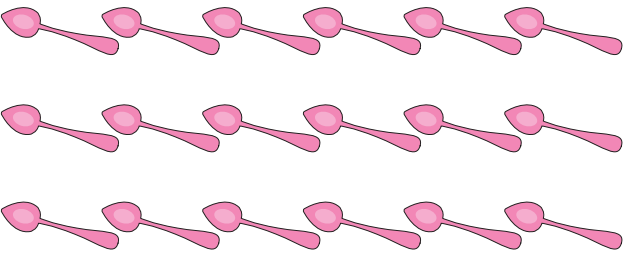
\_\_\_\_\_ tens and \_\_\_\_\_ ones




\_\_\_\_\_ tens and \_\_\_\_\_ ones



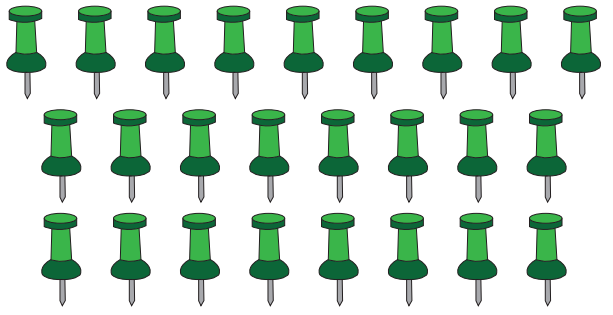
\_\_\_\_\_ tens and \_\_\_\_\_ ones



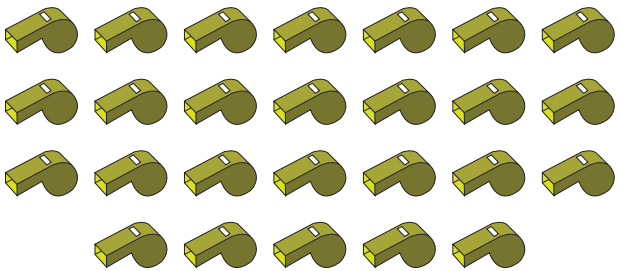
\_\_\_\_\_ tens and \_\_\_\_\_ ones



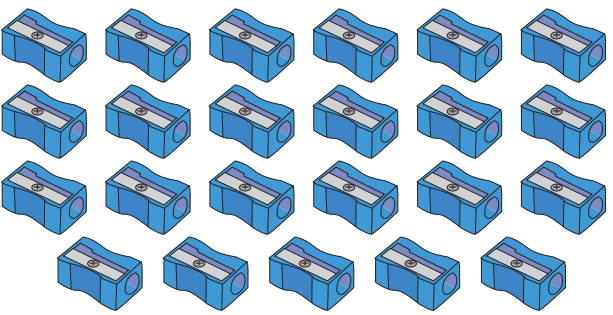
\_\_\_\_\_ tens and \_\_\_\_\_ ones



\_\_\_\_\_ tens and \_\_\_\_\_ ones



\_\_\_\_\_ tens and \_\_\_\_\_ ones



\_\_\_\_\_ tens and \_\_\_\_\_ ones



# PLACE VALUE

Name \_\_\_\_\_

Score \_\_\_\_\_

## Answer key

Count and write the correct number of tens and ones in the blanks.

  1   tens and   1   ones

  1   tens and   0   ones

  3   tens and   2   ones

  1   tens and   8   ones

  1   tens and   4   ones

  2   tens and   5   ones

  2   tens and   6   ones

  2   tens and   3   ones