




ESTIMATING WEIGHT

Name _____

Score _____


Estimate the weight of the objects.

1)



- a) 2 g b) 500 g

2)




- a) 10 tons b) 100 tons

3)



- a) 20 g b) 0.02 g

4)



- a) 20 lb b) 2 lb

5)



- a) 3 lb b) 3 oz

6)



- a) 500 g b) 50 g



Name _____


Score _____

ESTIMATING WEIGHT

Answer key

Estimate the weight of the objects.


1)



a) 2 g

b) 500 g

2)



a) 10 tons

b) 100 tons


3)



a) 20 g

b) 0.02 g

4)



a) 20 lb

b) 2 lb

5)



a) 3 lb

b) 3 oz

6)



a) 500 g

b) 50 g