




Name _____

Score _____

ESTIMATING WEIGHT

Estimate the weight of the objects.

1)



- a) 3kg b) 100 g

2)



- a) 4 oz b) 4 lb

3)



- a) 12 lb b) 2 lb

4)




- a) 5 kg b) 50 g

5)



- a) 50 oz b) 6 oz

6)



- a) 100 kg b) 200 g



Name _____


Score _____

ESTIMATING WEIGHT

Answer key

Estimate the weight of the objects.

1)



- a) 3kg b) 100 g

2)



- a) 4 oz b) 4 lb

3)



- a) 12 lb b) 2 lb

4)




- a) 5 kg b) 50 g

5)



- a) 50 oz b) 6 oz

6)



- a) 100 kg b) 200 g