




ESTIMATING WEIGHT

Name _____

Score _____

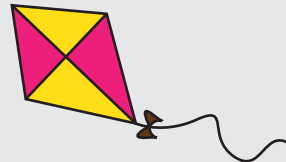
Estimate the weight of the objects.

1)



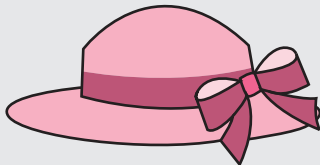
- a) 250 g b) 1.5 kg

2)




- a) 100 g b) 3 g

3)



- a) 2 oz b) 5 lb

4)



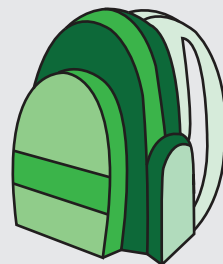
- a) 10 lb b) 1000 lb

5)



- a) 14 oz b) 4 oz

6)



- a) 3 kg b) 10 g



Name _____


Score _____

ESTIMATING WEIGHT

Answer key

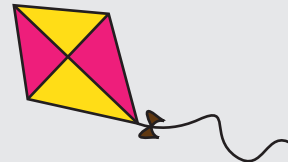
Estimate the weight of the objects.

1)



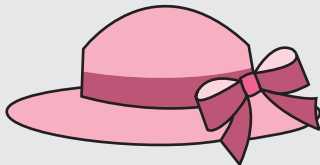
- a) 250 g b) 1.5 kg

2)




- a) 100 g b) 3 g

3)



- a) 2 oz b) 5 lb

4)



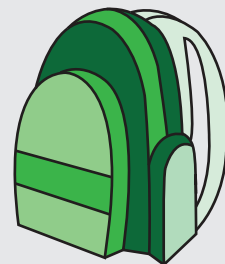
- a) 10 lb b) 1000 lb

5)



- a) 14 oz b) 4 oz

6)



- a) 3 kg b) 10 g