



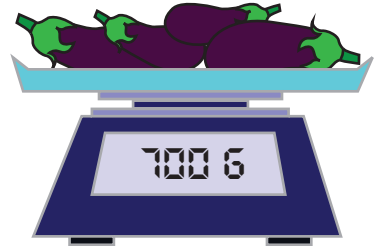
# MEASURING WEIGHT

Name \_\_\_\_\_


Score \_\_\_\_\_

Compare the weight of objects shown. Use  $>$ ,  $<$  or  $=$  symbol.

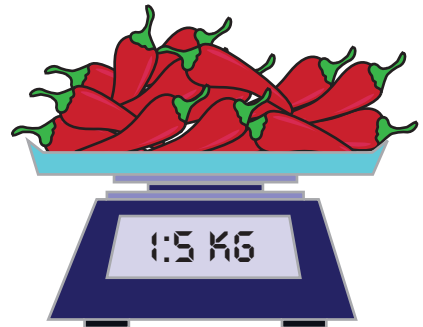
1)



2)



3)



4)





# MEASURING WEIGHT


Name \_\_\_\_\_

Score \_\_\_\_\_

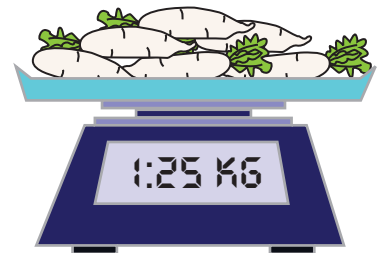

## Answer key

Compare the weight of objects shown. Use  $>$ ,  $<$  or  $=$  symbol.

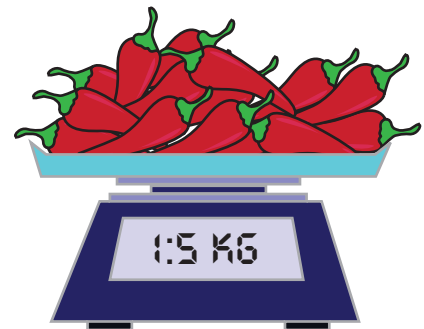
1)



2)



3)



4)

