





ORDERING WEIGHT

Name _____



Score _____

Use numbers 1-3 to order the objects from the heaviest to lightest.

1)





2)



3)



4)





ORDERING WEIGHT


Name _____

Score _____


Answer key

Use numbers 1-3 to order the objects from the heaviest to lightest.

1)



2




3



1


2)



1



3



2

3)



2



3




1


4)



2



1



3