




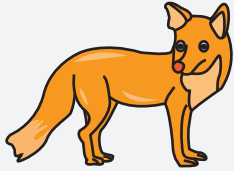
ORDERING WEIGHT

Name _____



Score _____

Use numbers 1-3 to order the objects from the lightest to heaviest.

1)



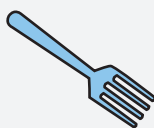
2)



3)



4)





ORDERING WEIGHT

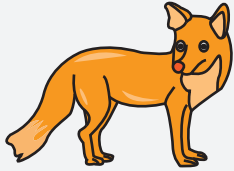
Name _____

Score _____


Answer key

Use numbers 1-3 to order the objects from the lightest to heaviest.

1)



2




3



1


2)



3



1



2

3)



1



3

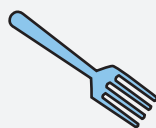


2

4)



2



1



3