



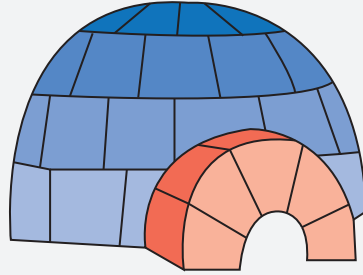

ORDERING WEIGHT

Name _____


Score _____

Use numbers 1-3 to order the objects from the heaviest to lightest.


1)



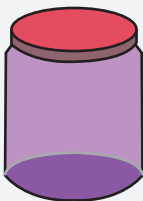
2)



3)



4)





ORDERING WEIGHT


Name _____

Score _____

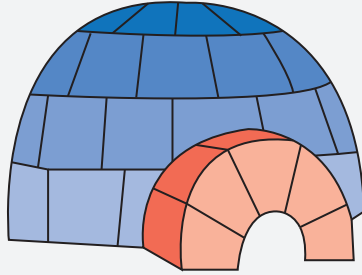
Answer key

Use numbers 1-3 to order the objects from the heaviest to lightest.

1)



2




1



3

2)



1



1




2

3)



3

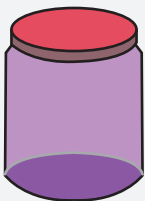


1



2

4)



2



3



1