



FRACTIONS

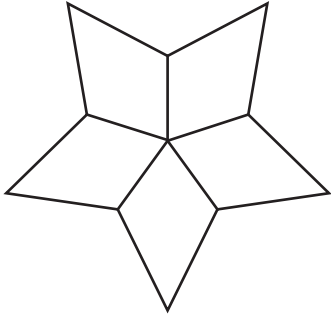
Name _____

Score _____

Color the figures according to the fractions given.

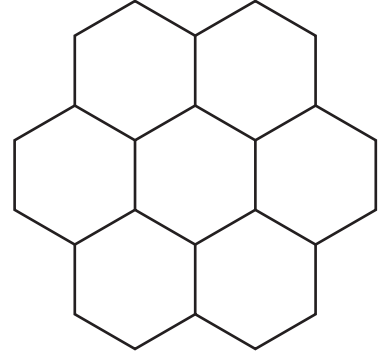
1)

$$\frac{2}{5} =$$



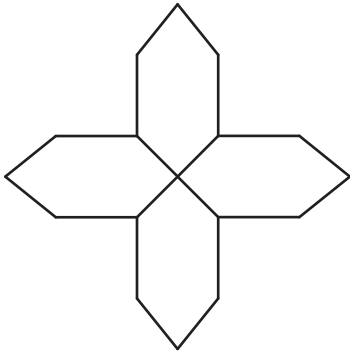
2)

$$\frac{1}{7} =$$



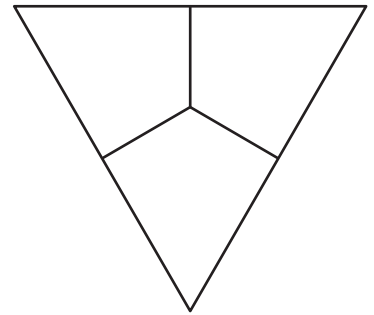
3)

$$\frac{1}{4} =$$



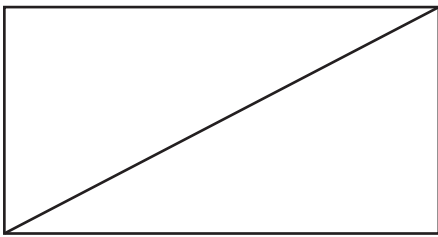
4)

$$\frac{2}{3} =$$



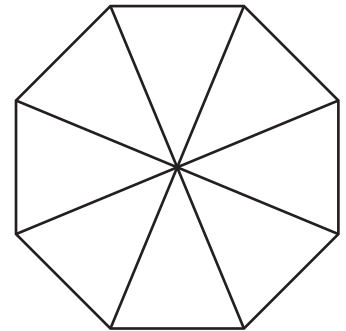
5)

$$\frac{1}{2} =$$



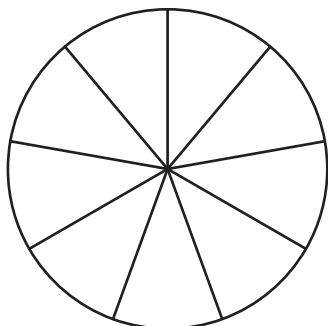
6)

$$\frac{4}{8} =$$



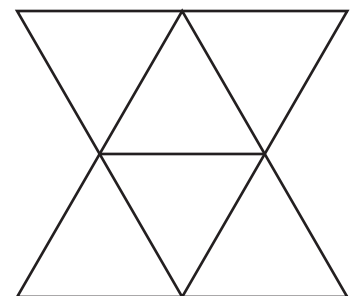
7)

$$\frac{8}{9} =$$



8)

$$\frac{3}{6} =$$





FRACTIONS

Name _____

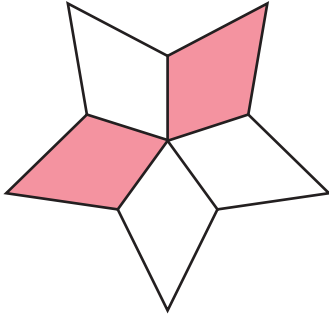
Score _____

Answer key

Color the figures according to the fractions given.

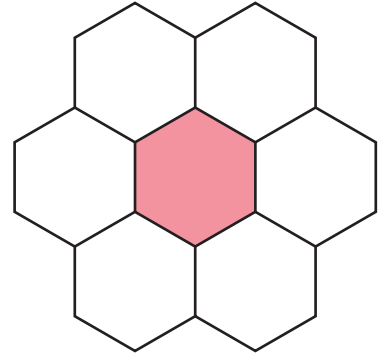
1)

$$\frac{2}{5} =$$



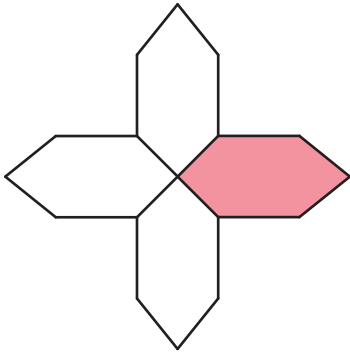
2)

$$\frac{1}{7} =$$



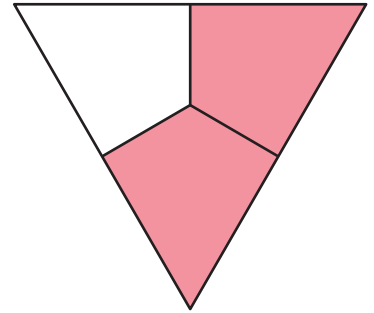
3)

$$\frac{1}{4} =$$



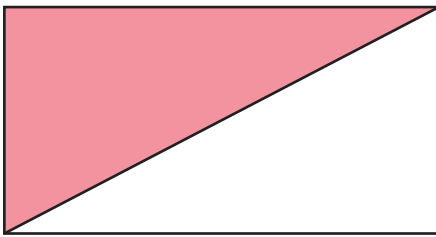
4)

$$\frac{2}{3} =$$



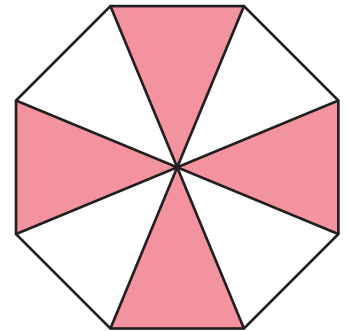
5)

$$\frac{1}{2} =$$



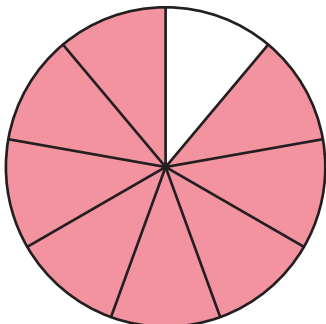
6)

$$\frac{4}{8} =$$



7)

$$\frac{8}{9} =$$



8)

$$\frac{3}{6} =$$

