



FRACTIONS


Name _____

Score _____

Color the figures according to the fractions given.

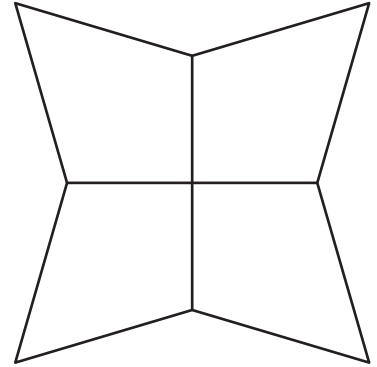
1)

$$\frac{7}{8} =$$



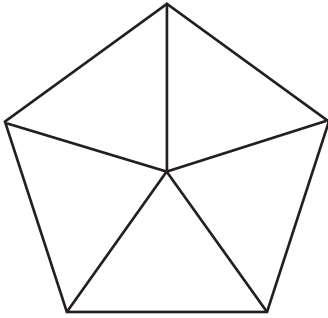
2)

$$\frac{3}{4} =$$



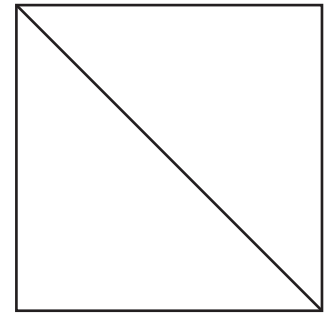
3)

$$\frac{4}{5} =$$



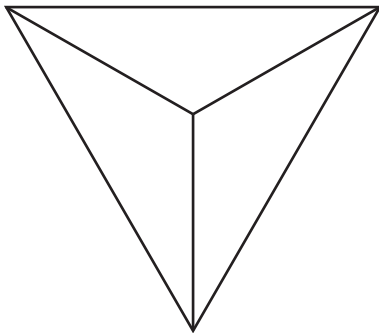
4)

$$\frac{1}{2} =$$




5)

$$\frac{2}{3} =$$



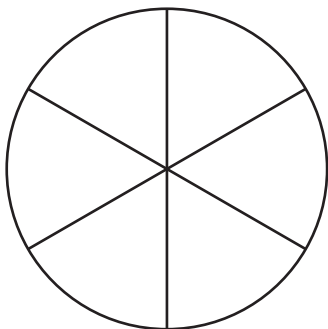
6)

$$\frac{6}{7} =$$



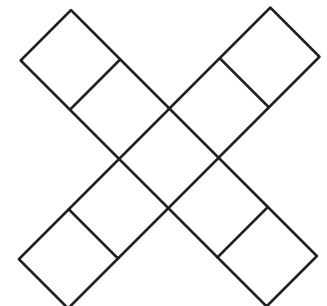
7)

$$\frac{1}{6} =$$



8)

$$\frac{4}{9} =$$





FRACTIONS

Name _____

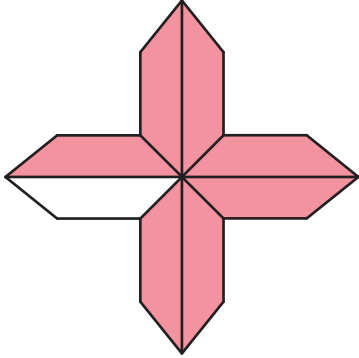
Score _____

Answer key

Color the figures according to the fractions given.

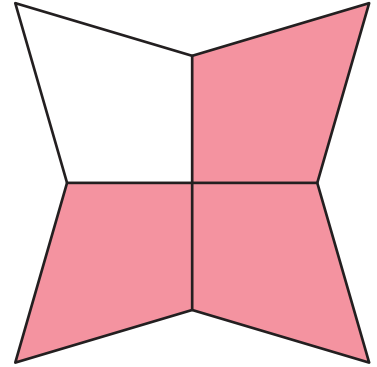
1)

$$\frac{7}{8} =$$



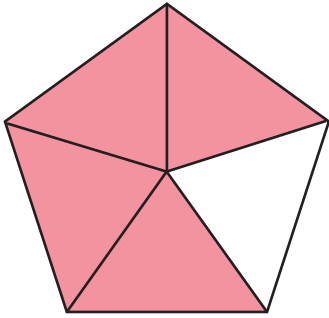
2)

$$\frac{3}{4} =$$



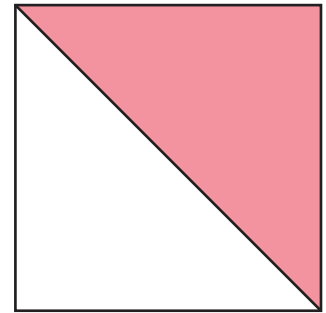
3)

$$\frac{4}{5} =$$



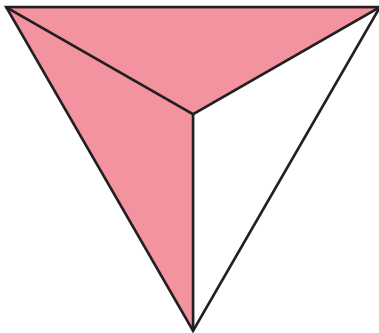
4)

$$\frac{1}{2} =$$



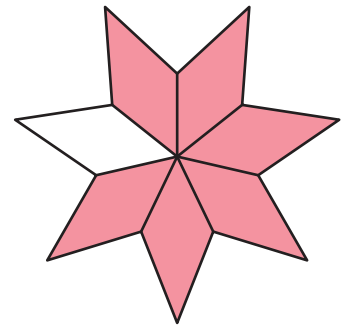
5)

$$\frac{2}{3} =$$



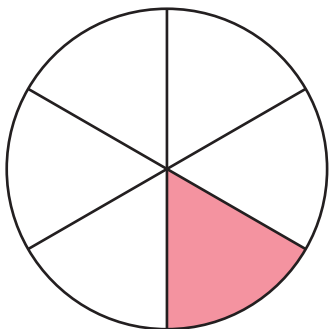
6)

$$\frac{6}{7} =$$



7)

$$\frac{1}{6} =$$



8)

$$\frac{4}{9} =$$

