



FRACTIONS

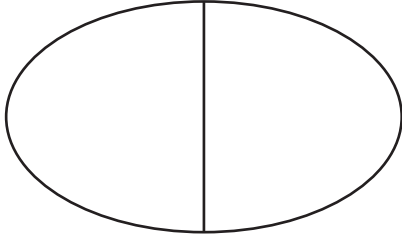
Name _____

Score _____

Color the figures according to the fractions given.


1)

$$\frac{1}{2} =$$



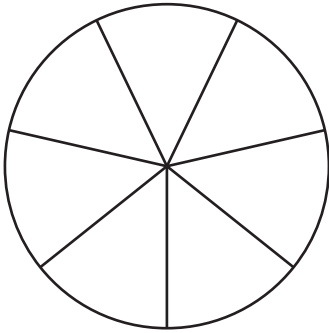
2)

$$\frac{2}{9} =$$



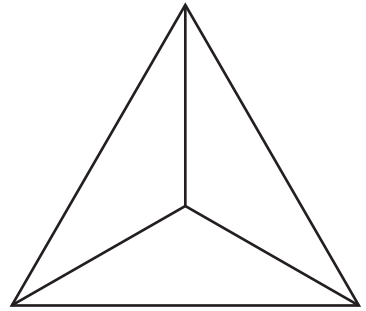
3)

$$\frac{5}{7} =$$



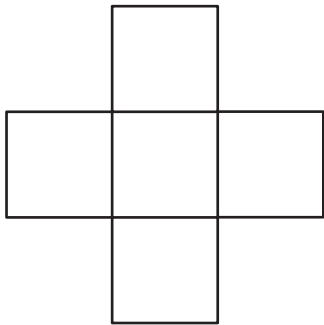
4)

$$\frac{1}{3} =$$



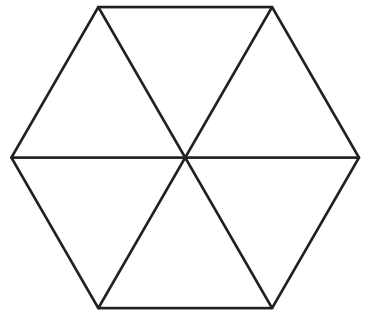
5)

$$\frac{3}{5} =$$




6)

$$\frac{2}{6} =$$



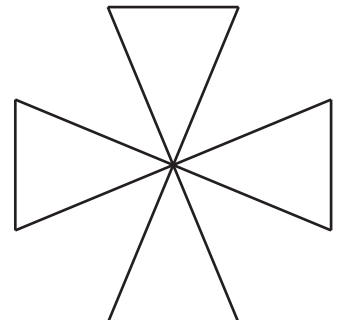
7)

$$\frac{6}{8} =$$



8)

$$\frac{1}{4} =$$





FRACTIONS

Name _____

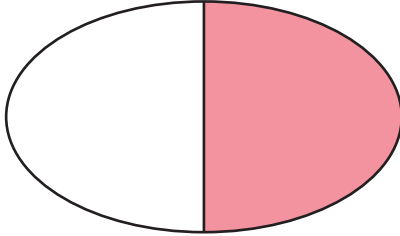
Score _____

Answer key

Color the figures according to the fractions given.


1)

$$\frac{1}{2} =$$



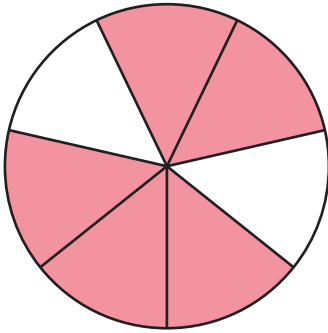
2)

$$\frac{2}{9} =$$



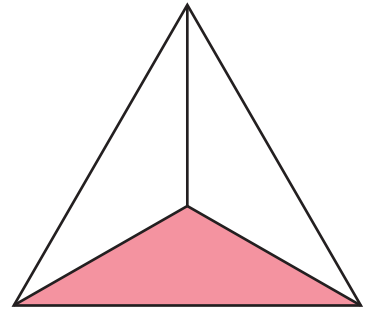
3)

$$\frac{5}{7} =$$



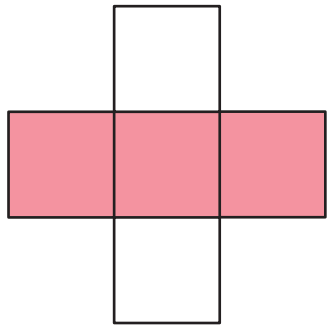
4)

$$\frac{1}{3} =$$



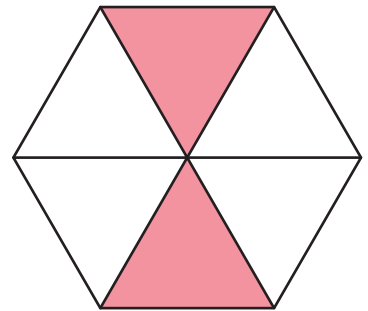
5)

$$\frac{3}{5} =$$



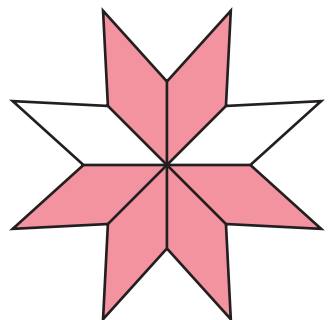
6)

$$\frac{2}{6} =$$



7)

$$\frac{6}{8} =$$



8)

$$\frac{1}{4} =$$

