

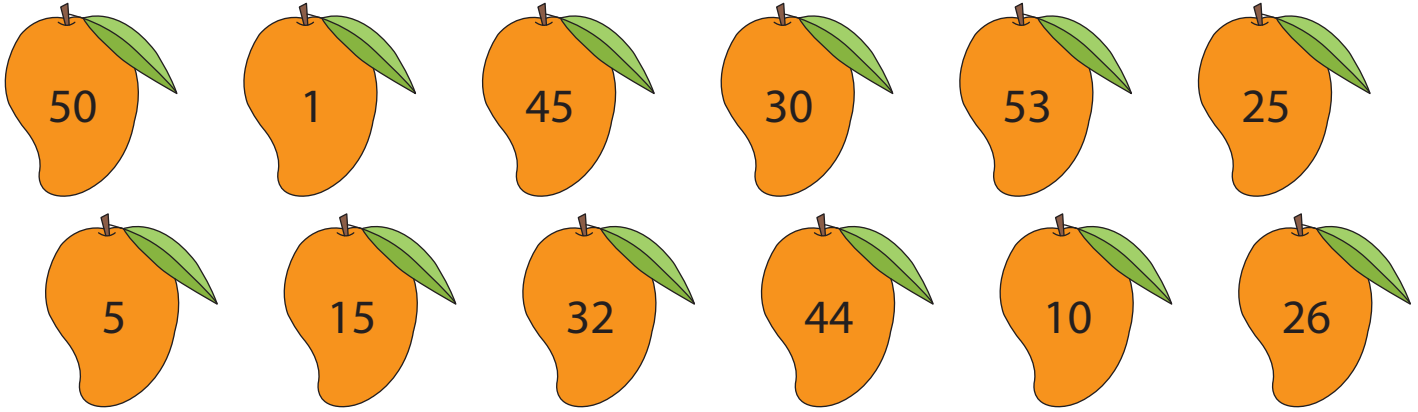


MULTIPLES OF NUMBERS


Name _____

Score _____

Check mark the mangoes that are multiples of 5.



Check mark the leaves that are multiples of 13.



Write the first five multiples of each number.

- | | | | | | | |
|----|----|-------|-------|-------|-------|-------|
| 1) | 16 | _____ | _____ | _____ | _____ | _____ |
| 2) | 15 | _____ | _____ | _____ | _____ | _____ |
| 3) | 2 | _____ | _____ | _____ | _____ | _____ |
| 4) | 9 | _____ | _____ | _____ | _____ | _____ |



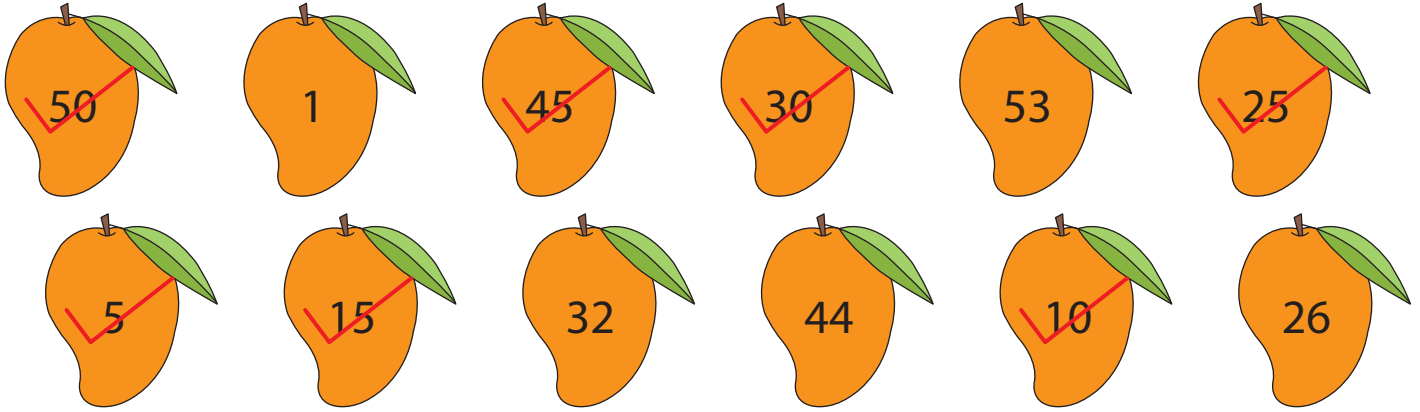
MULTIPLES OF NUMBERS

Name _____

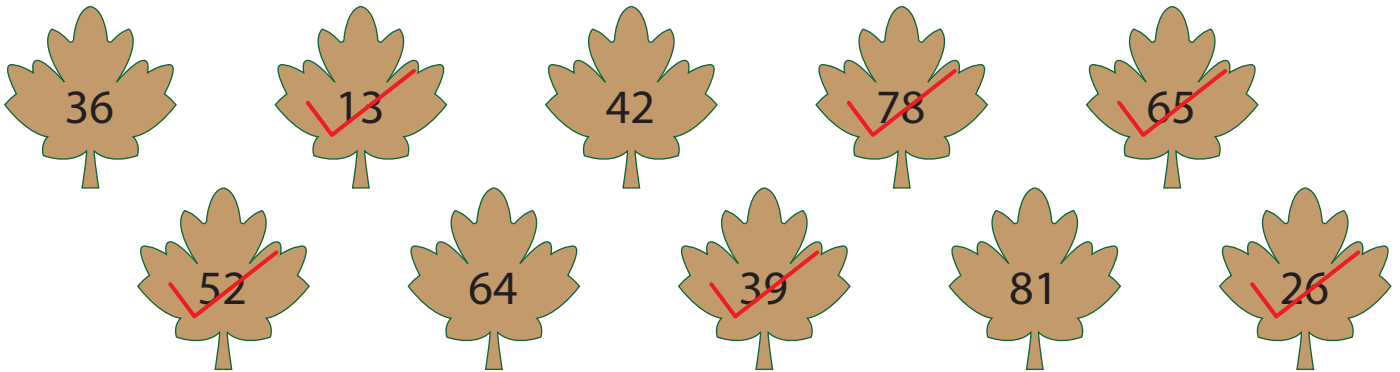
Score _____

Answer key

Check mark the mangoes that are multiples of 5.



Check mark the leaves that are multiples of 13.



Write the first five multiples of each number.

1)	16	<u>16</u>	<u>32</u>	<u>48</u>	<u>64</u>	<u>80</u>
2)	15	<u>15</u>	<u>30</u>	<u>45</u>	<u>60</u>	<u>75</u>
3)	2	<u>2</u>	<u>4</u>	<u>6</u>	<u>8</u>	<u>10</u>
4)	9	<u>9</u>	<u>18</u>	<u>27</u>	<u>36</u>	<u>45</u>