



MULTIPLES OF NUMBERS

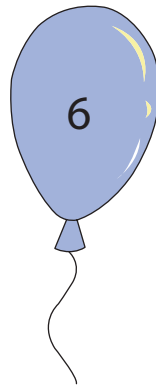




Name _____

Score _____

Check mark the pots that are multiples of 9.



Check mark the balloons that are multiples of 6.



Write the first five multiples of each number.

1) 10 _____ _____ _____ _____ _____

2) 4 _____ _____ _____ _____ _____

3) 17 _____ _____ _____ _____ _____

4) 8 _____ _____ _____ _____ _____



MULTIPLES OF NUMBERS

Name _____

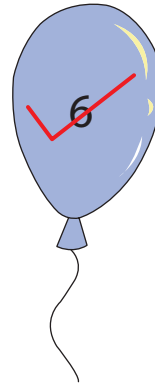
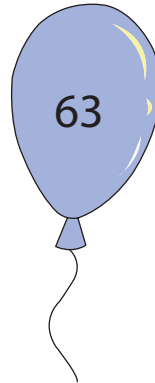
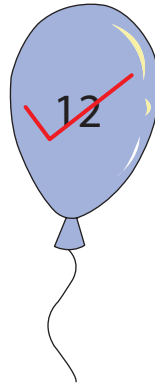

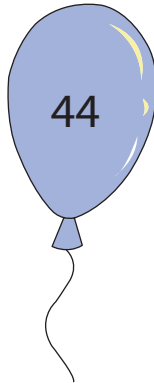
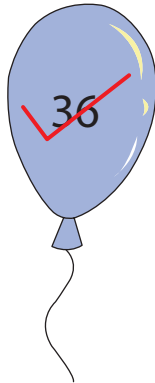
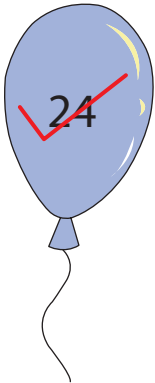

Score _____

Answer key

Check mark the pots that are multiples of 9.



Check mark the balloons that are multiples of 6.



Write the first five multiples of each number.

1) 10 10 20 30 40 50

2) 4 4 8 12 16 20

3) 17 17 34 51 68 85

4) 8 8 16 24 32 40