



MULTIPLES OF NUMBERS











Name _____

Score _____

Check mark the T-shirts that are multiples of 12.



Check mark the fish that are multiples of 7.



Write the first five multiples of each number.

1) 3 _____

2) 11 _____

3) 5 _____

4) 14 _____



MULTIPLES OF NUMBERS

Name _____


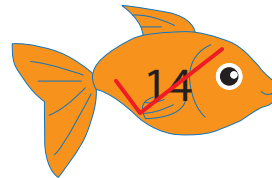





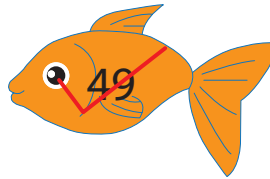
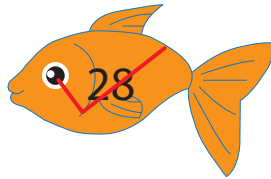
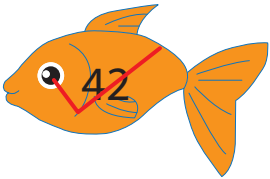
Score _____

Answer key

Check mark the T-shirts that are multiples of 12.



Check mark the fish that are multiples of 7.



Write the first five multiples of each number.

1) 3 3 6 9 12 15

2) 11 11 22 33 44 55

3) 5 5 10 15 20 25

4) 14 14 28 42 56 70