




ESTIMATING LENGTH

Name _____

Score _____

Estimate the length of each object.


1)



a) 4 m

b) 20 cm

2)



a) 15 ft

b) 10 cm

3)



a) 15 cm

b) 3 m

4)



a) 25 cm

b) 25 mm

5)



a) 10 mm

b) 8 in



Name _____


Score _____

ESTIMATING LENGTH

Answer key

Estimate the length of each object.


1)



~~a) 4 m~~

b) 20 cm

2)



a) 15 ft

~~b) 10 cm~~

3)



~~a) 15 cm~~

b) 3 m

4)



a) 25 cm

~~b) 25 mm~~

5)



a) 10 mm

~~b) 8 in~~