




# ESTIMATING LENGTH

Name \_\_\_\_\_

Score \_\_\_\_\_

Estimate the length of each object.

1)



a) 2 m

b) 5 cm

2)



a) 60 in

b) 25 cm

3)



a) 25 ft

b) 3 m

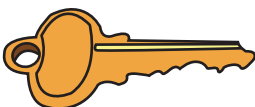
4)



a) 10 mm

b) 10 cm

5)



a) 5 cm

b) 5 m



# ESTIMATING LENGTH


Name \_\_\_\_\_

Score \_\_\_\_\_

## Answer key

Estimate the length of each object.

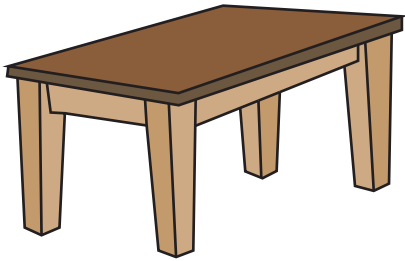
1)



a) 2 m

~~b) 5 cm~~

2)



~~a) 60 in~~

b) 25 cm

3)



~~a) 25 ft~~

b) 3 m

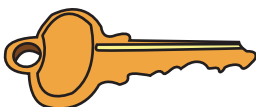
4)



a) 10 mm

~~b) 10 cm~~

5)



~~a) 5 cm~~

b) 5 m