




# MEASURING LENGTH

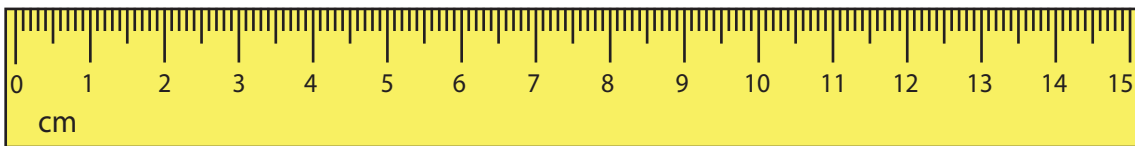
Name \_\_\_\_\_

Score \_\_\_\_\_

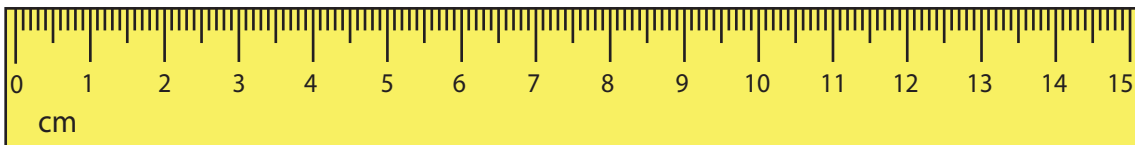
Measure the length of the beads laid and write down their exact length.



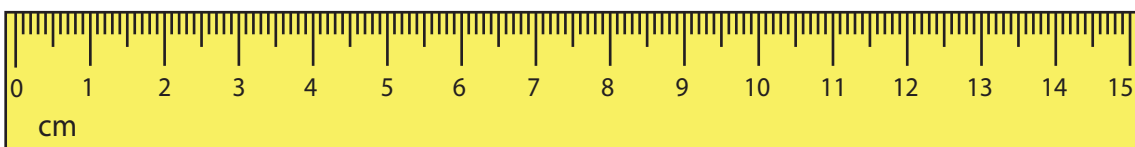
\_\_\_\_\_



\_\_\_\_\_



\_\_\_\_\_



\_\_\_\_\_



Name \_\_\_\_\_

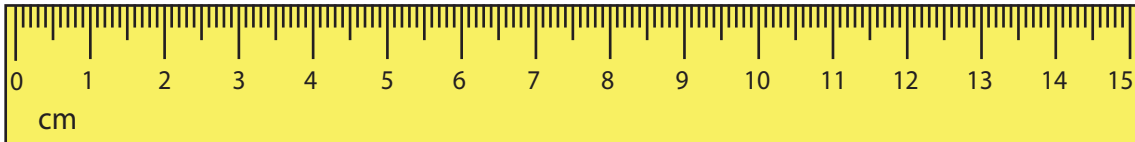
Score \_\_\_\_\_

# MEASURING LENGTH

## Answer key

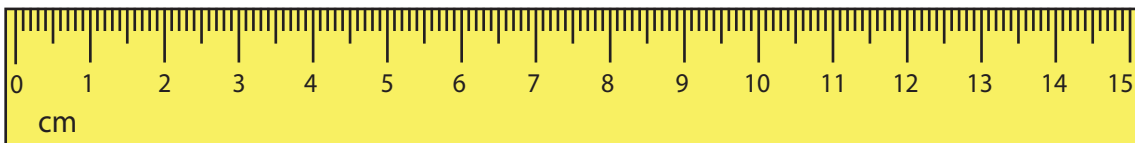
Measure the length of the beads laid and write down their exact length.

1) 



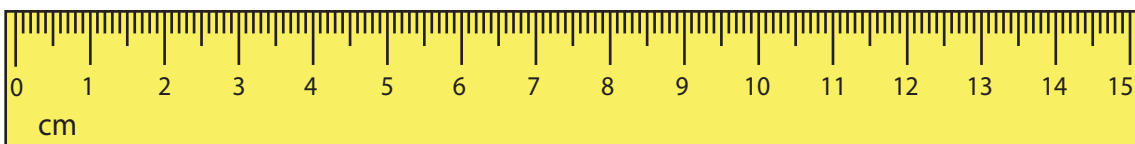
10  $\frac{1}{2}$  or 10.5 cm

2) 



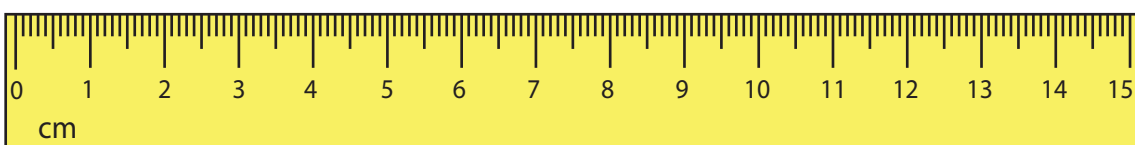
7  $\frac{1}{2}$  or 7.5 cm

3) 



13  $\frac{1}{2}$  or 13.5 cm

4) 



4  $\frac{1}{2}$  or 4.5 cm