





COMPARING NUMBERS

Name _____

Score _____

CN:28



Count the number of objects and fill in the blanks.



How many more flowers than leaves? _____

How many flowers? _____


Are the number of leaves and flowers equal? _____



How many apples? _____

How many less mangoes than apples? _____

Are the number of mangoes and apples equal? _____



How many ladybugs? _____

How many more ladybugs than butterflies? _____

How many butterflies? _____



COMPARING NUMBERS



Name _____

Score _____

Answer key

CN:28



Count the number of objects and fill in the blanks.



How many more flowers than leaves? 4

How many flowers? 16


Are the number of leaves and flowers equal? No



How many apples? 10

How many less mangoes than apples? 5

Are the number of mangoes and apples equal? No



How many ladybugs? 11

How many more ladybugs than butterflies? 2

How many butterflies? 9