



COMPARING NUMBERS

Name _____

Score _____

CN:27

Count the shapes and compare them using the correct symbol ($>$, $<$ and $=$).

| | | | |
|----|--|--|--|
| 1) | | | |
| 2) | | | |
| 3) | | | |
| 4) | | | |
| 5) | | | |



COMPARING NUMBERS

Name _____



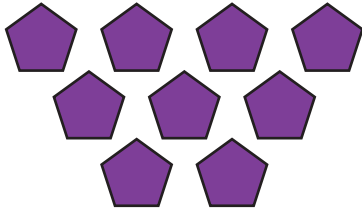
Score _____

Answer key




CN:27

Count the shapes and compare them using the correct symbol ($>$, $<$ and $=$).


1)






2)



3)



4)



5)

