



COMPARING NUMBERS

Name _____

Score _____

CN:26

Count the shapes and compare them using the correct symbol ($>$, $<$ and $=$).

1)			
2)			
3)			
4)			
5)			



COMPARING NUMBERS

Name _____

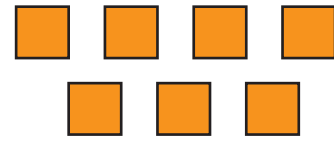

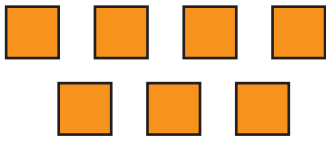
Score _____

Answer key




CN:26

Count the shapes and compare them using the correct symbol ($>$, $<$ and $=$).




1)






2)



3)



4)



5)

