




Heavy vs Light

Name _____

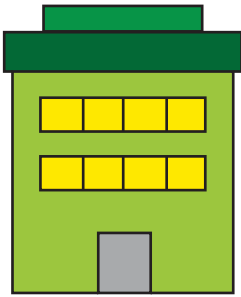
Score _____

Check mark the heaviest object and cross out the lightest one.


1)



2)



3)



4)





Heavy vs Light



Name _____

Score _____


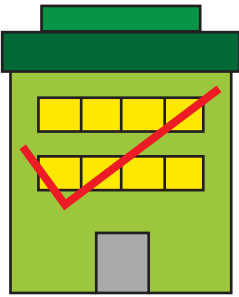
Answer key

Check mark the heaviest object and cross out the lightest one.


1)



2)



3)



4)

