



# Long vs Short

Name \_\_\_\_\_


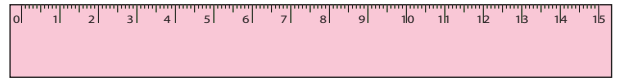
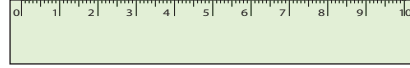
Score \_\_\_\_\_

Check mark the longest object and cross out the shortest one.

1)



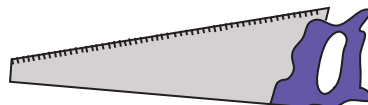
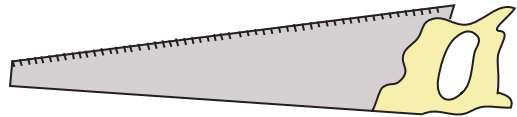
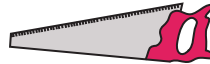
2)



3)



4)





# Long vs Short


## Answer key

Name \_\_\_\_\_

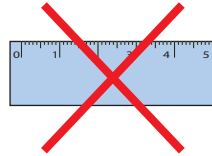
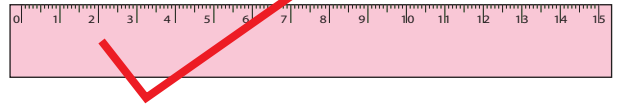
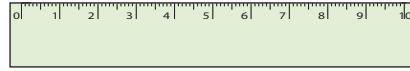
Score \_\_\_\_\_

Check mark the longest object and cross out the shortest one.

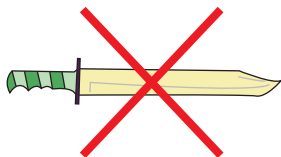
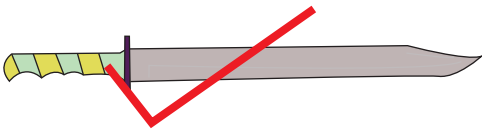
1)



2)



3)



4)

