



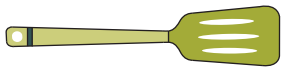
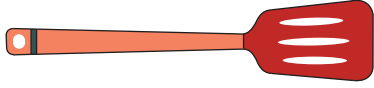
Long vs Short

Name _____

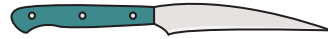
Score _____

Number the objects from longest to shortest.

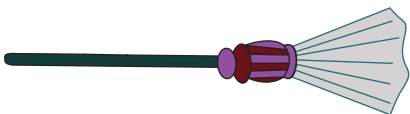
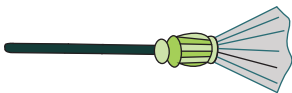
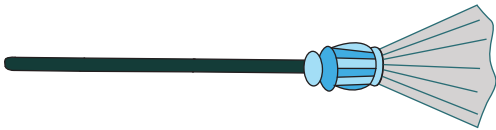
1)



2)



3)



4)





Long vs Short

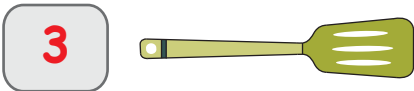

Answer key

Name _____

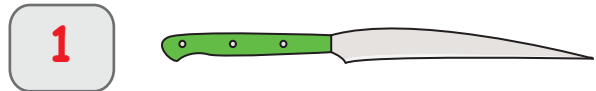
Score _____

Number the objects from longest to shortest.

1)



2)



3)



4)

