



# Line, Ray, Line segment, Plane

Name \_\_\_\_\_

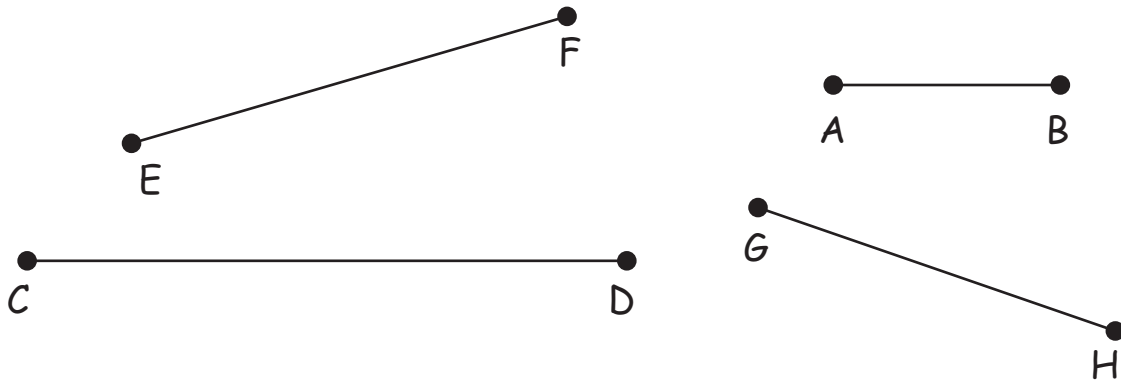
Score \_\_\_\_\_

GSL17

- 1) Draw two lines in a plane such that they do not intersect at any point and are equidistant from each other. What are these lines called as ?

\_\_\_\_\_

- 2) Measure the lengths of the line segments using a ruler and arrange them in the increasing order.





Name \_\_\_\_\_


Score \_\_\_\_\_

# Line, Ray, Line segment, Plane

## Answer key

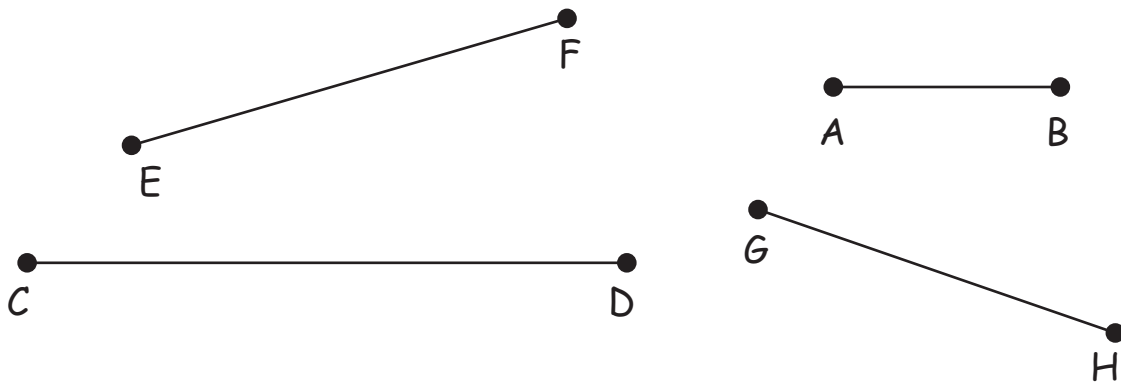
GSL17

- 1) Draw two lines in a plane such that they do not intersect at any point and are equidistant from each other. What are these lines called as ?



Parallel lines

- 2) Measure the lengths of the line segments using a ruler and arrange them in the increasing order.



A 3 cm B

G 5 cm H

E 6 cm F

C 8 cm D