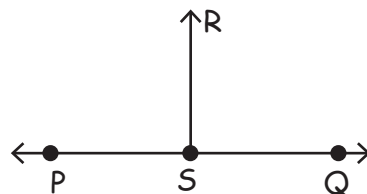


Line, Ray, Line segment, Plane

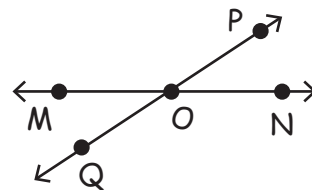
GSL09

Match the following.

1) Ray



2) Line segment



3) Perpendicular lines




4) Line



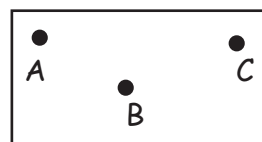
5) Parallel lines



6) Plane



7) Intersecting lines





Line, Ray, Line segment, Plane

Name _____

Score _____

Answer key

GSL09

Match the following.

1) Ray



2) Line segment



3) Perpendicular lines



4) Line



5) Parallel lines



6) Plane



7) Intersecting lines

