



# DECOMPOSING 2-D SHAPES


Name \_\_\_\_\_

Score \_\_\_\_\_

CD:14

*(Answers may vary)*

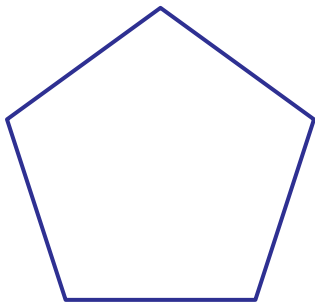
- 1) Decompose the square into a rhombus, a trapezoid and a triangle.



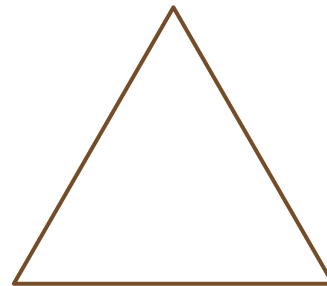
- 4) Decompose the rectangle into 3 squares.




- 2) Decompose the pentagon into 4 triangles.



- 5) Decompose the triangle into 2 trapezoids and a triangle.



- 3) Decompose the parallelogram into 2 rhombuses.



- 6) Decompose the square into 4 rectangles.





# DECOMPOSING 2-D SHAPES

Name \_\_\_\_\_

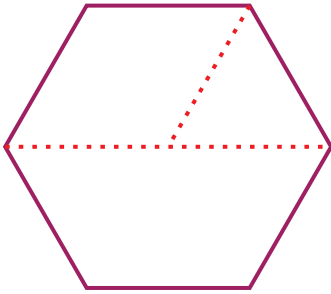
Score \_\_\_\_\_

## Answer key


CD:14

*(Answers may vary)*

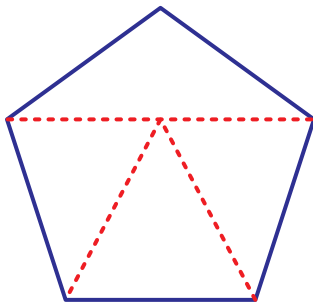
- 1) Decompose the square into a rhombus, a trapezoid and a triangle.



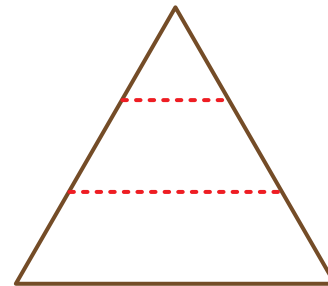
- 4) Decompose the rectangle into 3 squares.




- 2) Decompose the pentagon into 4 triangles.



- 5) Decompose the triangle into 2 trapezoids and a triangle.



- 3) Decompose the parallelogram into 2 rhombuses.



- 6) Decompose the square into 4 rectangles.

