



COMPOSING 2-D SHAPES


Name _____

Score _____


CD:02

Choose from the below options, the new figures you get after decomposing each shape shown below.

1)




a)



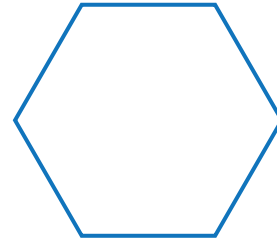
b)



c)



2)



a)




b)




c)



3)



a)



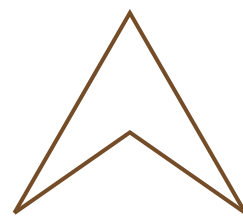
b)



c)



4)



a)



b)



c)





COMPOSING 2-D SHAPES

Name _____

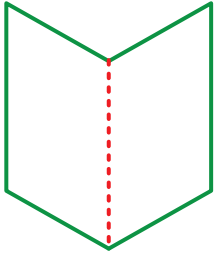
Score _____

Answer key


CD:02

Choose from the below options, the new figures you get after decomposing each shape shown below.

1)



a)



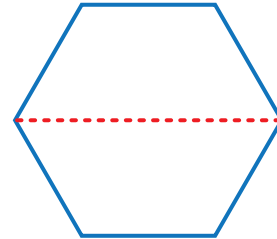
b)



c)



2)



a)



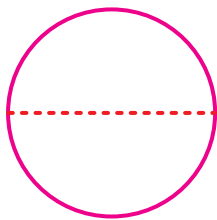
b)




c)



3)



a)



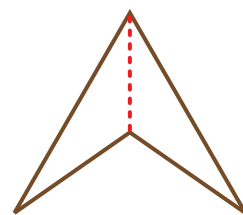
b)



c)



4)



a)



b)



c)

