



Abacus Addition

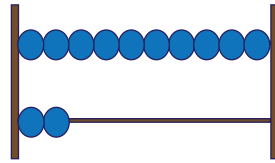
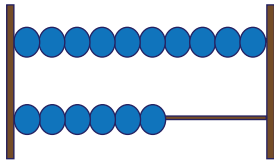
Name _____

Score _____

AS:V:10

Count the beads on the abacus and find the sum.

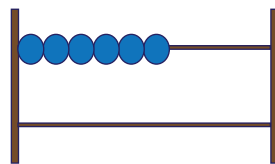
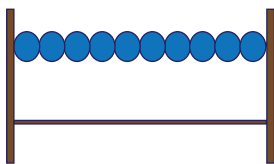
1)



+

=

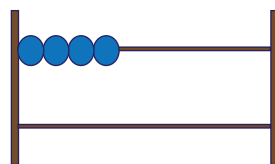
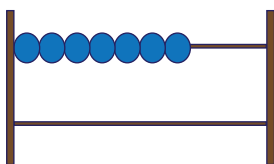
2)



+

=

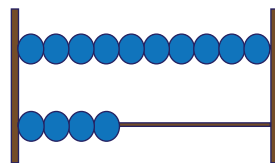
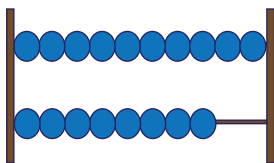
3)



+

=

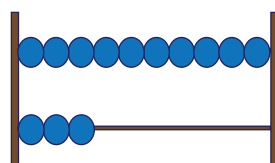
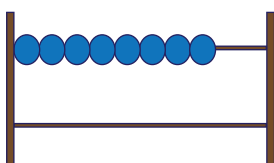
4)



+

=

5)



+

=



Abacus Addition

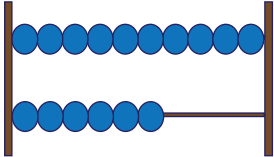
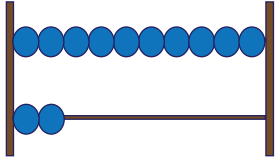
Name _____

Score _____

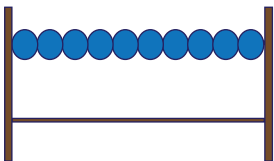
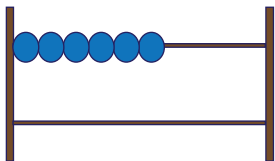
Answer key

AS:V:10

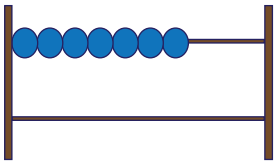
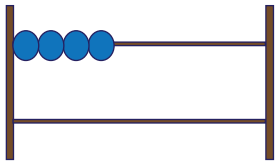
Count the beads on the abacus and find the sum.

1)  +  = $\boxed{28}$

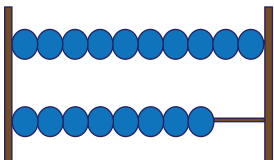
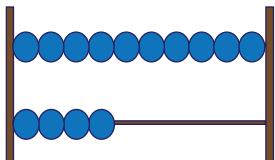
$\boxed{16}$ + $\boxed{12}$ = $\boxed{28}$

2)  +  = $\boxed{16}$

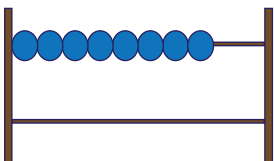
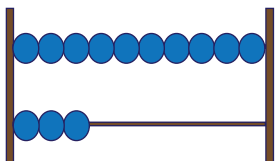
$\boxed{10}$ + $\boxed{6}$ = $\boxed{16}$

3)  +  = $\boxed{11}$

$\boxed{7}$ + $\boxed{4}$ = $\boxed{11}$

4)  +  = $\boxed{32}$

$\boxed{18}$ + $\boxed{14}$ = $\boxed{32}$

5)  +  = $\boxed{21}$

$\boxed{8}$ + $\boxed{13}$ = $\boxed{21}$