



# Add the Shapes

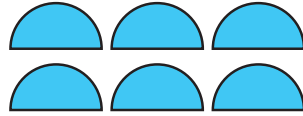
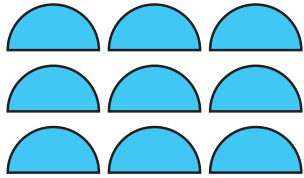
Name \_\_\_\_\_

Score \_\_\_\_\_

AS:III:15

Count and add the shapes.



1)



+

=



2)



+

=



3)



+

=

4)



+

=



Name \_\_\_\_\_

Score \_\_\_\_\_

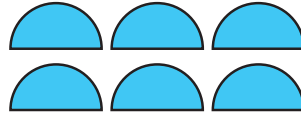
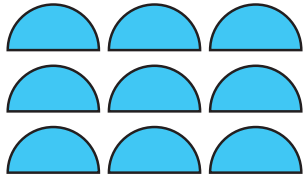
# Add the Shapes

Answer key

AS:III:15



Count and add the shapes.

1)





$$\boxed{9} + \boxed{6} = \boxed{15}$$

2)





$$\boxed{5} + \boxed{5} = \boxed{10}$$

3)



$$\boxed{3} + \boxed{8} = \boxed{11}$$

4)



$$\boxed{7} + \boxed{6} = \boxed{13}$$