













# TALLY - DRAWING SHAPES

Name \_\_\_\_\_

Score \_\_\_\_\_

TS12

Count the tally marks and write them. Also draw the shape to represent the tally marks shown in each problem.



# TALLY - DRAWING SHAPES

Name \_\_\_\_\_

Score \_\_\_\_\_

## Answer key

TS12

Count the tally marks and write them. Also draw the shape to represent the tally marks shown in each problem.

 <b>10</b>		
 <b>6</b>		
 <b>14</b>		
 <b>5</b>		
 <b>3</b>		