



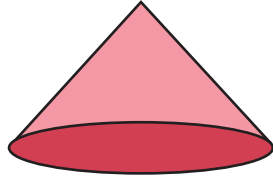
Identify Shapes

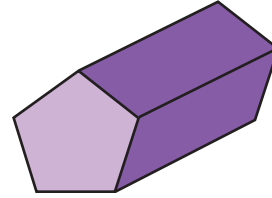
Name _____

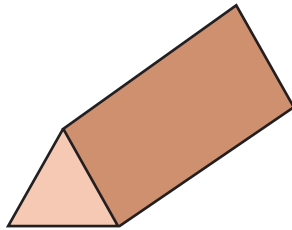
Score _____


TD18

Identify each shape and name them from the suggestions shown at the end of the page.

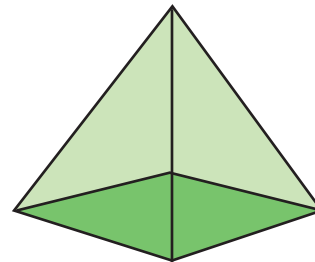












Cube

Square pyramid

Cylinder

Square

Cone

Pentagonal prism

Triangular prism

Pyramid

Parallelogram



Identify Shapes

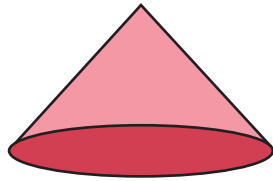
Name _____

Score _____

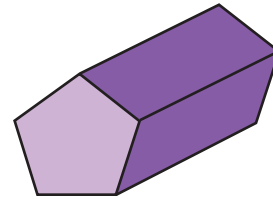
Answer key

TD18

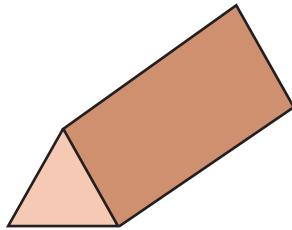
Identify each shape and name them from the suggestions shown at the end of the page.




Cone



Pentagonal prism



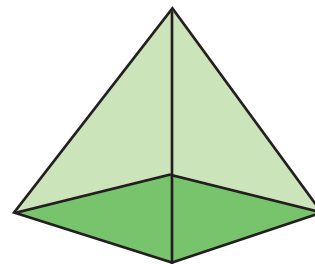
Triangular prism



Square



Parallelogram



Square pyramid

Cube

Square pyramid

Cylinder

Square

Cone

Pentagonal prism

Triangular prism

Pyramid

Parallelogram