




Identify Shapes

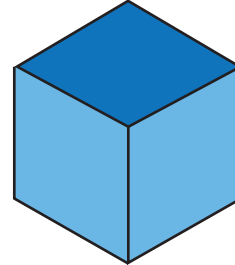
Name _____

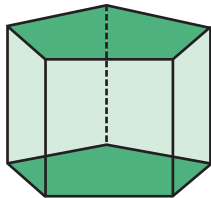
Score _____


TD17

Identify each shape and name them from the suggestions shown at the end of the page.

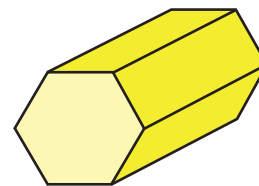












- | | | | |
|-------------------------|---------------|------------------------|-----------------|
| <i>Sphere</i> | <i>Cuboid</i> | <i>Cone</i> | <i>Triangle</i> |
| <i>Pentagonal prism</i> | | <i>Hexagonal prism</i> | |
| <i>Cylinder</i> | <i>Oval</i> | <i>Cube</i> | |



Identify Shapes


Name _____

Score _____

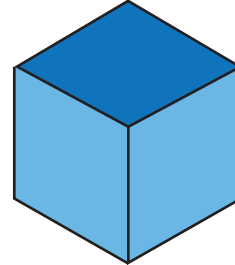
Answer key

TD17

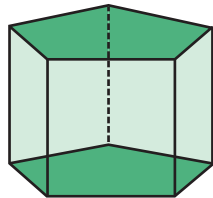
Identify each shape and name them from the suggestions shown at the end of the page.




Cylinder



Cube



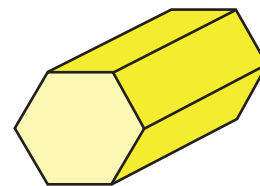
Pentagonal prism



Triangle



Cuboid



Hexagonal prism

Sphere

Cuboid

Cone

Triangle

Pentagonal prism

Hexagonal prism

Cylinder

Oval

Cube