



Matching Shapes

Name _____

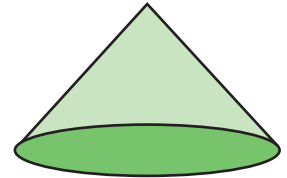
Score _____

TD16

Match the 3D names with its respective shapes.

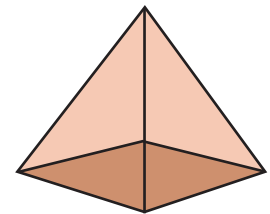
1)

Square pyramid



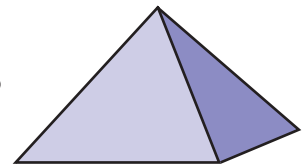
2)

Cuboid



3)

Cone



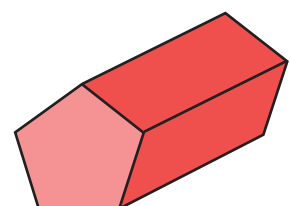
4)

Pentagonal prism



5)

Pyramid





Name _____

Score _____

Matching Shapes

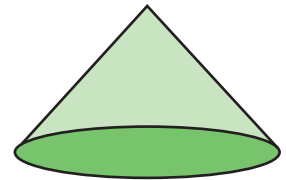
Answer key

TD16

Match the 3D names with its respective shapes.

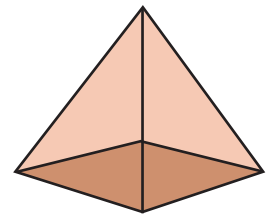
1)

Square pyramid



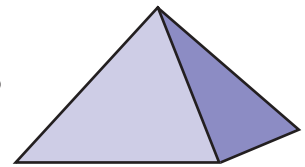
2)

Cuboid




3)

Cone



4)

Pentagonal prism



5)

Pyramid

