



# Matching Shapes

Name \_\_\_\_\_


Score \_\_\_\_\_

TD15

Match the 3D names with its respective shapes.

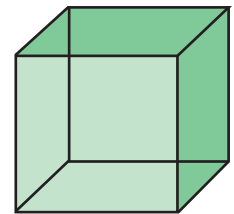
1)

Cylinder




2)

Triangular prism



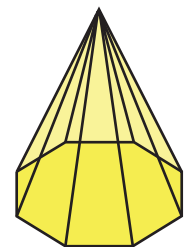
3)

Octagonal pyramid



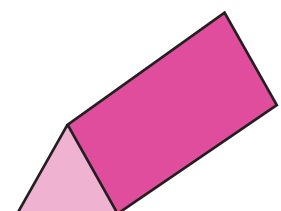
4)

Sphere



5)

Cube





Name \_\_\_\_\_

Score \_\_\_\_\_

# Matching Shapes


**Answer key**

TD15

Match the 3D names with its respective shapes.

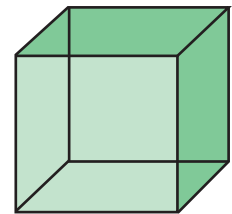
1)

Cylinder




2)

Triangular prism



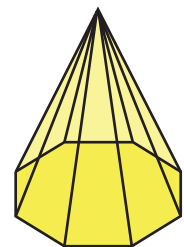
3)

Octagonal pyramid



4)

Sphere



5)

Cube

