



2D and 3D shapes

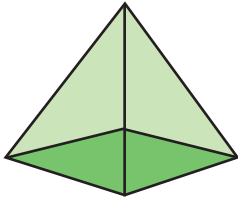
Name _____

Score _____

TD14


Name each shape and find if they are 2D or 3D shape.

1)




- 2D shape
 3D shape

2)



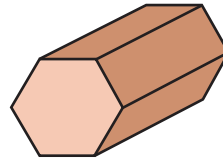
- 2D shape
 3D shape

3)



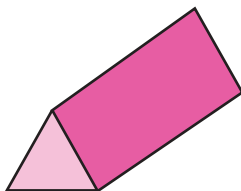
- 2D shape
 3D shape

4)



- 2D shape
 3D shape

5)



- 2D shape
 3D shape

6)



- 2D shape
 3D shape



2D and 3D shapes

Name _____

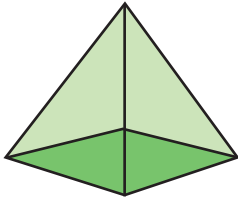
Score _____

Answer key

TD14

Name each shape and find if they are 2D or 3D shape.


1)



- 2D shape
 3D shape

Square pyramid


2)



- 2D shape
 3D shape

Triangle

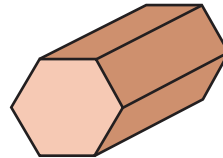
3)



- 2D shape
 3D shape

Rhombus

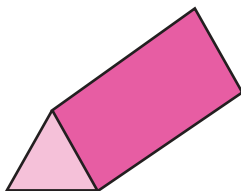
4)



- 2D shape
 3D shape

Hexagonal prism

5)



- 2D shape
 3D shape

Triangular prism

6)



- 2D shape
 3D shape

Rectangle