



2D and 3D shapes


Name _____

Score _____

TD13

Name each shape and find if they are 2D or 3D shape.

1)




- 2D shape
 3D shape

2)




- 2D shape
 3D shape

3)



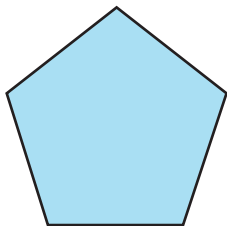
- 2D shape
 3D shape

4)



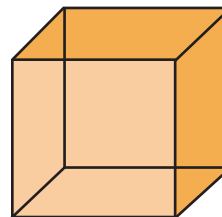
- 2D shape
 3D shape

5)



- 2D shape
 3D shape

6)



- 2D shape
 3D shape



2D and 3D shapes

Name _____


Score _____

Answer key

TD13

Name each shape and find if they are 2D or 3D shape.

1)



- 2D shape
 3D shape

Circle


2)



- 2D shape
 3D shape

Cuboid


3)



- 2D shape
 3D shape

Cylinder

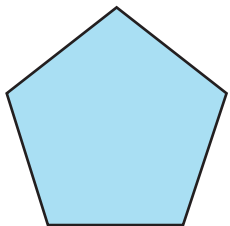
4)



- 2D shape
 3D shape

Oval

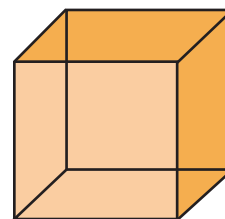
5)



- 2D shape
 3D shape

Pentagon

6)



- 2D shape
 3D shape

Cube