




# Identify Shapes

Name \_\_\_\_\_

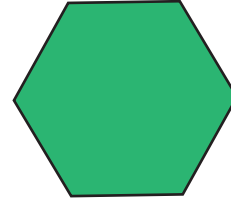
Score \_\_\_\_\_

GS:I:18

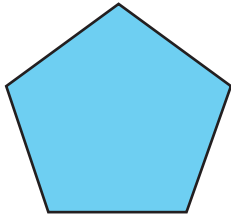
Identify and pick the names of the shapes given below.



\_\_\_\_\_




\_\_\_\_\_



\_\_\_\_\_



\_\_\_\_\_



\_\_\_\_\_



\_\_\_\_\_

|                |                  |                      |
|----------------|------------------|----------------------|
| <i>Hexagon</i> | <i>Trapezoid</i> | <i>Pentagon</i>      |
| <i>Circle</i>  | <i>Oval</i>      | <i>Triangle</i>      |
|                |                  | <i>Parallelogram</i> |



# Identify Shapes


Name \_\_\_\_\_

Score \_\_\_\_\_

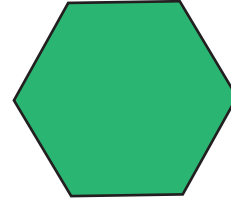
## Answer key

GS:I:18

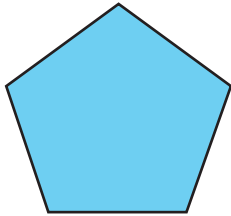
Identify and pick the names of the shapes given below.



Triangle




Hexagon



Pentagon



Trapezoid



Oval



Parallelogram

Hexagon      Trapezoid      Pentagon

Circle      Oval      Parallelogram

Triangle