



Matching Shapes

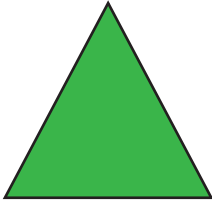
Name _____

Score _____


GS:I:11

Match the 2D Shapes.


1)




2)




3)



4)



5)





Matching Shapes

Name _____

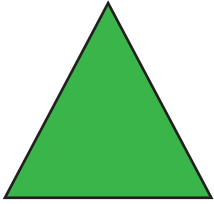
Score _____

Answer key


GS:I:11

Match the 2D Shapes.


1)




2)



3)



4)



5)

