



TALLY MARKS




Name _____

Score _____




Circle the correct answer.

TS32




Which tally marks represent number 3?

| | | |
|---|---|---|
|  |  |  |
|---|---|---|




Which tally marks represent number 9?

| | | |
|---|---|---|
|  |  |  |
|---|---|---|


Which tally marks represent number 6?

| | | |
|---|---|---|
|  |  |  |
|---|---|---|

Which tally marks represent number 12?

| | | |
|---|---|---|
|  |  |  |
|---|---|---|

Which tally marks represent number 4?

| | | |
|---|---|---|
|  |  |  |
|---|---|---|



TALLY MARKS

Name _____

Score _____

Answer key

TS32

Circle the correct answer.

Which tally marks represent number 3?

| | | |
|--|--|--|
| | | |
|--|--|--|

Which tally marks represent number 9?

| | | |
|--|--|--|
| | | |
|--|--|--|

Which tally marks represent number 6?

| | | |
|--|--|--|
| | | |
|--|--|--|

Which tally marks represent number 12?

| | | |
|--|--|--|
| | | |
|--|--|--|

Which tally marks represent number 4?

| | | |
|--|--|--|
| | | |
|--|--|--|