



COMPARING TALLY MARKS

Name _____

Score _____

TS20

Compare each pair of tally marks using the symbols $>$, $<$ or $=$.

1)



2)



3)



4)



5)



6)



7)





COMPARING TALLY MARKS

Name _____


Score _____

Answer key

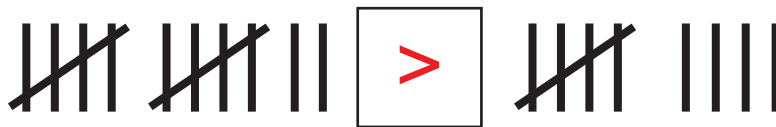
TS20

Compare each pair of tally marks using the symbols $>$, $<$ or $=$.


1)



2)



3)



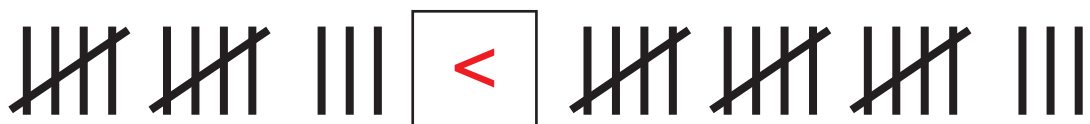
4)



5)



6)



7)

