



# PATTERN - SHAPES


Name \_\_\_\_\_

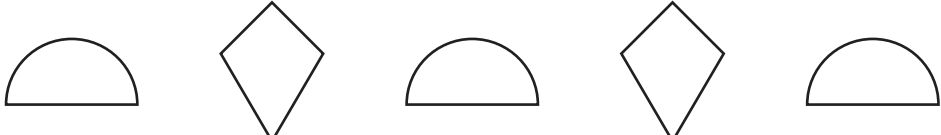
Score \_\_\_\_\_


PS:20

Draw the shape to complete the pattern.


1)  \_\_\_\_\_

2)  \_\_\_\_\_

3)  \_\_\_\_\_

4)  \_\_\_\_\_

5)  \_\_\_\_\_

6)  \_\_\_\_\_



# PATTERN - SHAPES

Name \_\_\_\_\_

Score \_\_\_\_\_

## Answer key

PS:20

Draw the shape to complete the pattern.

1) A sequence of six shapes: a square, a trapezoid, a trapezoid, a square, a trapezoid, and a red trapezoid on a line.

2) A sequence of six shapes: a heart, an oval, a diamond, a heart, an oval, and a red diamond on a line.

3) A sequence of six shapes: a semi-circle, a diamond, a semi-circle, a diamond, a semi-circle, and a red diamond on a line.

4) A sequence of six shapes: a parallelogram, a parallelogram, a pentagon, a pentagon, a parallelogram, and a red parallelogram on a line.

5) A sequence of six shapes: a five-pointed star, a five-pointed star, a five-pointed star, a triangle, a triangle, and a red triangle on a line.

6) A sequence of six shapes: a hexagon, a hexagon, a circle, a circle, a hexagon, and a red hexagon on a line.