



Name _____

MATCHING PICTOGRAPH

Score _____

PGS:27

Match the pictographs with the information given in the tables.
Each picture represents 4 flowers.


1)

Day 1	12
Day 2	20
Day 3	8



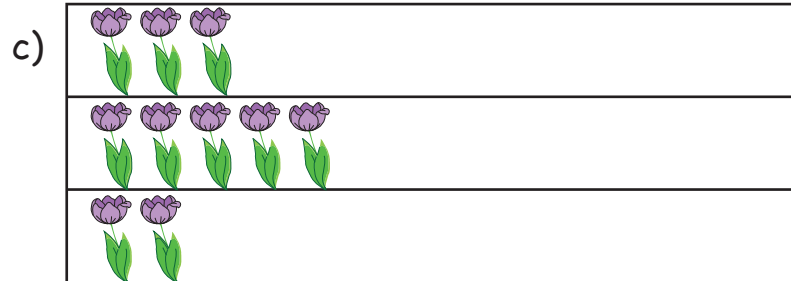
2)

Day 1	16
Day 2	28
Day 3	24




3)

Day 1	4
Day 2	8
Day 3	16



4)

Day 1	40
Day 2	48
Day 3	44



5)

Day 1	12
Day 2	28
Day 3	32






MATCHING PICTOGRAPH

Answer key

Match the pictographs with the information given in the tables.
Each picture represents 4 flowers.


1)

Day 1	12
Day 2	20
Day 3	8




2)

Day 1	16
Day 2	28
Day 3	24




3)

Day 1	4
Day 2	8
Day 3	16



4)

Day 1	40
Day 2	48
Day 3	44



5)

Day 1	12
Day 2	28
Day 3	32

